



**N. K. BAGRODIA SECTOR-17, PHASE-II,  
GLOBAL SCHOOL DWARKA, NEW DELHI-78**

G-mail: nkbglobalschool@gmail.com, Website: www.nkbglobalschool.com

**SESSION: 2024-25  
MID TERM**

**SAMPLE PAPER**

**SUBJECT: ENGLISH  
CLASS: III**

**MAX. MARKS: 50  
DURATION: 2 HRS**

**General Instructions:**

- The paper is divided into three sections.
- Section A (Reading) is of 20 marks.
- Section B (Grammar) is of 10 marks.
- Section C (Writing & Literature) is of 20 marks.
- Read all the questions thoroughly before answering.
- Attempt all questions in neat handwriting.

**SECTION – A (READING)**

**UNSEEN PASSAGE -1**

**Q.1 Read the following passage and answer any 10 questions that follow. (1 x 10= 10)**

The crow is the most prominent bird in the world. Crows are found everywhere in the world except Antarctica. There are about forty types of crows, but we are familiar with only two or three types of crows. We often see the crows on the top of our buildings, but they like open spaces where there are dense trees. By the way, the crows live alone but whenever one of them dies, the other crows hover around it to mourn. Dead animals are the favorite food of the crows. Crows are neither vegetarian nor non-vegetarian. That means they eat anything. The average lifespan of a crow is 14 to 15 years. A crow can lay up to four eggs at a time.

**i) How many eggs can a crow lay at a time?**

- a) Three eggs                      b) Five eggs                      c) Four eggs

**ii) When do other crows hover?**

- a) When they are thirsty    b) When they see a dead animal    c) When a crow dies

**iii) The word 'hover' in the passage means \_\_\_\_\_.**

- a) To stay in the air                      b) To sink                      c) To drop

**iv) The favorite food of the crows is \_\_\_\_\_.**

- a) Fruits                      b) Dead animals                      c) Seeds

**v) Where do crows like to live?**

- a) In Jungle                      b) In open spaces                      c) On roofs

**vi) Crows are not found in**

- a. Antarctica                      b) India                                      c) America

**vii) The average lifespan of a crow is 14 to 15 years. (True / False)**

**viii) Unscramble the word from the passage “rmonu”.**

**ix) Fill in the spaces to form a meaningful word from the passage.**

\_\_\_\_\_ R O \_\_\_\_\_ I N \_\_\_\_\_ T

**x) Complete the given sentence from the passage.**

There are forty types of crows, but we are familiar with only \_\_\_\_\_

**xi) Write the suitable title for the above given passage.**

**xii) Find out Proper noun from the above passage.**

**UNSEEN PASSAGE -2**

**Q2 Read the following passage and answer any 10 questions that follow.**

**(1 x 10= 10)**

Maya loved the early mornings when the world was quiet and still. She would wake up before the sun, tiptoeing through her house to avoid waking her family. The kitchen was her favorite place at that hour, where she could sit by the window with a warm cup of tea and watch the sky slowly change colors.

As the sun began to rise, the birds would start singing, and Maya felt like she was the only person in the world who could hear their songs. She loved the way the sunlight filtered through the trees, casting long shadows on the ground. On some mornings, the dew on the grass sparkled like tiny diamonds, and she would take a deep breath, filling her lungs with the crisp, fresh air.

Maya cherished these moments of solitude. They gave her a sense of peace and clarity that she carried with her throughout the day. By the time the rest of her family woke up, she was ready to face whatever the day had in store for her, energized and calm.

- i) What time of day does Maya love the most?**
- ii) Why does Maya tip-toe through her house in the morning?**
- iii) What is Maya's favorite place in the house during the early morning?**
- iv) What does Maya do while sitting by the window in the kitchen?**
- iv) How does Maya feel when she hears the birds singing?**
- v) Describe the effect of the sunlight on the trees and the ground.**
- vi) What does the dew on the grass look like to Maya?**
- vii) How does the early morning air make Maya feel?**
- viii) Why are these early morning moments important to Maya?**
- ix) How does Maya feel by the time her family wakes up?**
- x) What does the passage suggest about Maya's personality or habits?**

**SECTION – B (GRAMMAR)**

**(10)**

**Q3 Tick the correct option with appropriate noun as mentioned in the bracket:**

**(2x0.5=1)**

A (litter/cluster) of puppies attacked (litter/cluster) of cats. {Collective noun}

**Q4 Fill in the blanks with suitable articles.**

**(1X2=2)**

i) I read \_\_\_\_\_ interesting book last night.

ii) Can you pass me \_\_\_\_\_ salt, please?

**Q5 Rewrite the sentence using correct punctuation marks.**

**(2x0.5= 1)**

what time does the movie start

**Q6 Fill in the blanks with suitable tenses mentioned in the brackets.**

**(0.5x4= 2)**

i) She \_\_\_\_ (walk) to school every day. {Simple present tense}

ii) They \_\_\_\_ (play) soccer last Saturday. {Simple past tense}

iii) We \_\_\_\_\_ (enjoy) watching movies on Fridays. {Simple present tense}

iv) We \_\_\_\_\_ (watch) a movie on Saturday. {Simple past tense}

**Q7 Write the correct form of comparative and superlative degree to form a meaningful sentence.**

**(1x2=2)**

A train is \_\_\_ than a car but an airplane is the \_\_\_\_\_ of all. (fast)

**Q8 Read the sentences carefully and choose the correct form of “Spend” in simple present tense.**

**(1x1=1)**

i) I spend all my pocket money on science kits.

ii) I spent all my pocket money on science kits.

**Q9 Write the suitable degree of given adjectives as given in the brackets.**

**(2x0.5=1)**

i) Easy- \_\_\_\_\_ (comparative degree)

ii) beautiful \_\_\_\_\_ (superlative degree)

**Q10 Observe carefully and write 5 to 6 lines about the picture below :**

**(5x 1 = 5)**

**Help Box : Family, toys, ball, park, picnic, bag, play, happy, fishing**



**Q11 You are Ronak/Radha. Write a letter to your friend Shyam inviting him on your birthday party.(5)**

**OR**

**You are Atharv/Anaya. Write a letter to your friend sharing experience of your visit to an amusement park.**

**LITERATURE**

**Q12 Read the lines carefully and answer the questions given below**

**(2x1=2)**

**“Something is coming uphill”, said Mother Wolf, twitching one ear. “Get ready”.**

- i) Write the name of the chapter.
- ii) Who was coming uphill?

**Q13 Answer the following questions. ( Any two)**

**(1x2=2)**

- i) What information did Tabaqui give to Father Wolf and Mother Wolf?**
- ii) What happened to the evil spirits once the sun was back?**
- iii) What did the pedlar tell his wife?**

**Q14 Write the meaning of any two given words.**

**(2x1=2)**

- i) shell
- ii) treasure
- iii) snapped
- iv) naked

**Q15 What did they have to decide at the grand meeting?**

**(2x1=2)**

**OR**

**Describe the Man-cub.**

**Q16 Find the words in the poem ‘Homes’ which mean the same as these words**

**(2x1=2)**

- i) Large
- ii) happy



N. K. BAGRODIA GLOBAL SCHOOL

SECTOR-17, PHASE-II, DWARKA, NEW DELHI-78

G-mail: nkglobalschool@gmail.com, Website: www.nkglobalschool.com

SESSION: 2024-25

**MID TERM**  
**SAMPLE PAPER**

**SUBJECT: MATHS**

**CLASS: III**

**MAX. MARKS: 50**

**DURATION: 2 hrs**

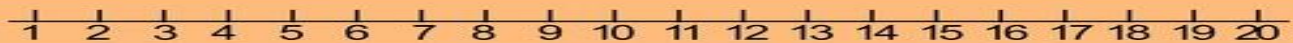
**General Instructions:**

- The paper consists of three sections
- Section A is of 20 marks. It contains 10 questions of 2 marks each.
- Section B is of 10 marks. It contains 10 questions of 1 mark each.
- Section C is of 20 marks. It contains 4 questions of 3 marks and 2 questions of 4 marks each.
- Read all the questions carefully before answering.

**SECTION A (DO ANY 10 QUESTIONS)**

**(10 x 2 = 20)**

Q1. Dhruv is writing numbers from 1 to 20 on a number line. Write any two numbers nearest to 20 from the number line given below.




Q2. What is the sum of the smallest 2 digit number and the largest 3 digit number?

Q3. Draw array with dots to show  $3 \times 8 = 8 \times 3$

Q4. Name the arrays represented by dots in the given picture.

Q4.



Q5. Read the table and answer the following questions.

Manu	Rashi	Rina	Arun	Jamal
1	5	6	3	4

(a) Who read 1 book less than Rashi? (b) Who read the least number of books?


Q6. The table given below shows the number of boys and girls in four sections of class 3 in a school. Study the table to answer the question.

Class	Number of boys	Number of girls
3-A	24	21
3-B	22	22
3-C	24	23
3-D	20	21

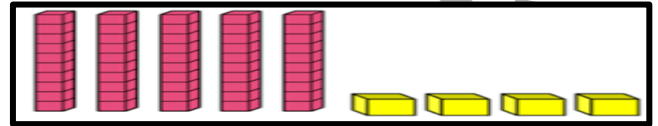
- a. Which section has the largest number of students?  
b. Which section of class 3 has even number of girls?

Q7. A box of rakhi contains 8 rakhis in each box. How many rakhis will be there in 5 boxes? (Write statement and show solution.)

Q8. Write 4 even number between 176 and 187.



Q9. If 34 is shown like this in the given picture.



What is the number formed by the given picture?

Q10. If you subtract me from 175, you get 100. Who am I?

Q11. Find the total number of colours in 3 rainbows? (Show solution.)

**SECTION B (DO ANY 10 QUESTIONS)**

(10 x 1 = 10)

Q1. Which of the following is the same as  $5 + 40 + 2$ ?

- a. 42                      b. 56                      c. 92                      d. 47

Q2. Any number multiplied by 1 will always result give \_\_\_\_\_.

- a. 0                      b. 1                      c. same number                      d. none of the above

Q3. If I take one bead from the tens place of given abacus. What will be the new number formed?



- a. 531                      b. 431                      c. 221                      d. 521

Q4. 100 less than 480 is \_\_\_\_\_.

- a. 580                      b. 380                      c. 0                      d. none of the above

Q5. Number of bananas in a dozen are \_\_\_\_\_.

- a. 100                      b. 20                      c. 2                      d. 12

Q6. 5396 \_\_\_\_\_ 3286 Put the sign (<, >, =)

Q7.  $1000 = 999 +$  \_\_\_\_\_

- a. 1                      b. 2                      c. 3                      d. 4

Q8. Number before 9901 is \_\_\_\_\_

Q9. Solve-  $10 \times 7 \times 0 = \underline{\hspace{2cm}}$

Q10. Choose the correct option:

a. 6,8

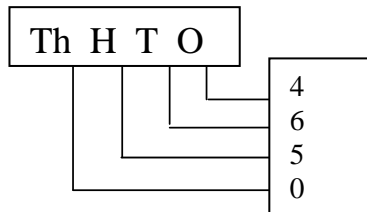
b. 3, 4

48 =  $\frac{\hspace{1cm}}{\hspace{1cm}} \times \frac{\hspace{1cm}}{\hspace{1cm}}$

c. both a and b

d. none of the above

Q11. What is the Place value of 5 in the abacus given below?



a. 50

b. 500

c. 5000

d. 5

**SECTION C**

(20)

Q1 Solve:

(3)

a. 

Th	H	T	O
5	2	3	5
---	4	0	2 3

b. 

2	6
<u>X</u>	5

Q2 Solve: a.  $109+453$

b.  $371+810$

(3)

Q3 Solve and check subtraction by addition:  $400-209$

(3)

Q4. A new pair of slippers cost ₹850. Gautam has ₹ 380 with him. How much more money does he need to buy the slippers? (Write statement and show solution)

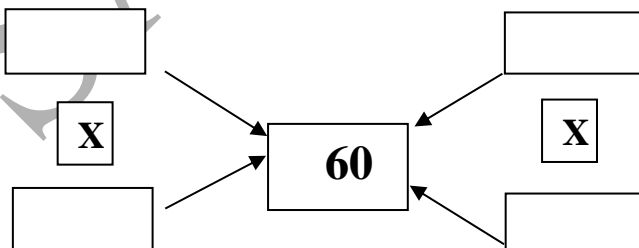
(3)

**OR**

Q4. Radha sold 345 tickets for school fete. Her sister Arpita sold 190 tickets more than her. How many tickets did Arpita sell? (Write statement and show solution)


Q5.(i). Find 2 different ways to make the number in the center.

(2+2=4)



(ii) Complete.

a. 5 flowers have \_\_\_\_\_ petals.






b. 4 octopuses have \_\_\_\_\_ legs.



Q6. In a school, number of saplings are planted by the following::

(4)






Members		Number of saplings
Girls		232
Boys		156
Teachers		114

**Now, answer these questions.**

- Who has planted the maximum number of saplings?
- The number of saplings planted by all are \_\_\_\_\_ numbers. (odd/ even)
- What is the place value of 5 in 156?
- Find the sum of saplings planted by teachers and boys.

**OR**

Q6. Hema went to market with her mother. She looked at the prices and said to her mother about the price list.

				
₹ 50	₹ 500	₹ 150	₹ 80	₹ 100

Now, answer the following questions.

- What is the total price of flour and rice?
- Does oil costs ₹ 100 more than a pack of sugar?(True/False)
- If the price of a sugar packet is ₹ 50. What is the price of 3 such packets?
- By how much is ghee costlier than the oil?



SAMPLE PAPER